

MODEL ENTERENCE TEST PAPER

BRITISH/PAKISTANI SECTION

SUBJECTS: MATHMATICS

GRADE: 1

TOTAL MARKS: 25

I. Number names: [1X4=4]

1. 11- _____

2. 48- _____

3. 22 - _____

4. 33- _____

II. a. Circle the number that is greater: [0.5X4=2]

1. 20, 52

2. 19, 09

b. Circle the number that is less:

1. 13, 24

2. 41, 40

III. Complete the table:

[0.75x4=3]

1. $2 \times 3 =$ _____

2. $2 \times 9 =$ _____

3. $2 \times 2 =$ _____

4. $2 \times 6 =$ _____

IV. Write the numbers what comes before:

[0.5X4=2]

1. _____ 30

2. _____ 54

3. _____ 69

4. _____ 91

I. Write the numbers what comes after:

[0.5X4=2]

1. 23 _____

2. 71 _____

3. 36 _____

4. 77 _____

II. Write the numbers what comes between:

[0.5X8=4]

1. 75, _____, _____, 78

2. 38, _____, _____, 41

3. 60, _____, _____, 63

4. 96, _____, _____, 99

VII. Add:

[1x 3=3]

4	3	2
<u>+6</u>	<u>+2</u>	<u>+0</u>
_____	_____	_____

VIII. Subtract:

[1x3=3]

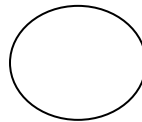
9	7	2
-3	-5	-0
_____	_____	_____
_____	_____	_____

IX. Circle the correct answer:

[0.25x 4=2]

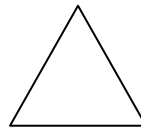
Triangle,

Circle




Circle,

Triangle



Rectangle,

Pyramid



Square,

Oval

