

MODEL ENTERENCE TEST PAPER

BRITISH/PAKISTANI SECTION

SUBJECTS: MATHMATICS

GRADE: 1

TOTAL MARKS: 25

I. Write the numbers what comes before:

[0. 5X4=2]

1. _____ 39


2. _____ 54

3. _____ 60


4. _____ 92

II. What time is it:

[1x2=2]



_____ O'clock



_____ O'clock

III. Write the numbers what comes between:

[0.5X8=4]

1. 75, _____, _____, 78

2. 38, _____, _____, 41

3. 60, _____, _____, 63

4. 96, _____, _____, 99

IV. a. Circle the number that is greater:

[0.5X4=2]

1. 25, 52

2. 19, 91

b. Circle the number that is less:

1. 13, 24

2. 41, 45

V. Number names:

[1X4=4]

1. 19- _____

2. 48- _____

3. 12 - _____

4. 33- _____

VI. Add:

[1x 3=3]

4	5	6
+6	+2	+0
_____	_____	_____

VII. Subtract:

[1x3=3]

9	7	3
-3	-5	-0
_____	_____	_____

VIII. Complete the table:

[0.75x4=3]

1. $2 \times 2 =$ _____

2. $2 \times 5 =$ _____

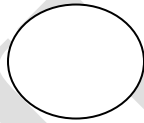
3. $2 \times 7 =$ _____

4. $2 \times 6 =$ _____

IX. Match the words with shapes:

[0.25x 4=2]


Triangle



Circle



Square



Rectangle

